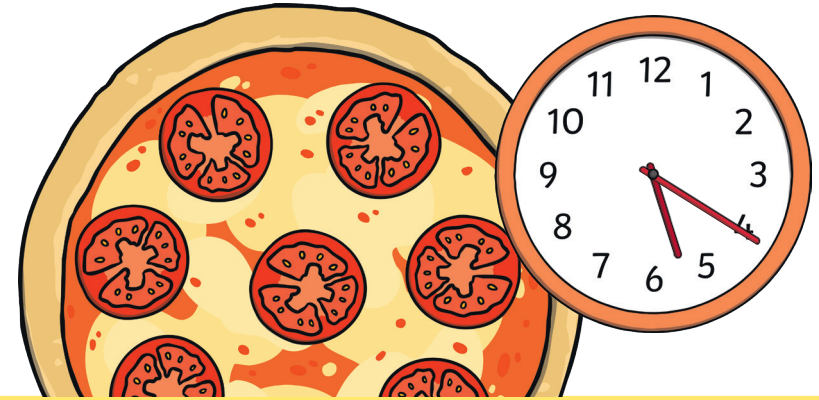


Time Word Problems Challenge Cards

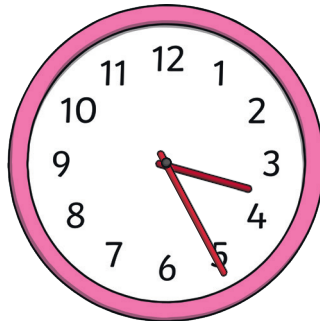
Time Word Problems Challenge Cards

1. Dad put a pizza in the oven at 20 minutes past 5. It takes 15 minutes to cook. What time did he take it out of the oven?



Time Word Problems Challenge Cards

2. Sam went for a 15-minute run around the park. She stopped running at 25 minutes past 3. What time did she start running?



Time Word Problems Challenge Cards

3. A baby woke up at 25 minutes to 3 ready for his bottle. 15 minutes later, he had finished drinking his milk. What time did he finish?



Time Word Problems Challenge Cards

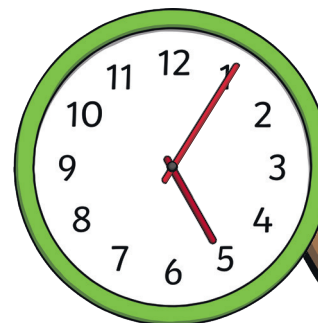
4. The doctor saw a patient at 25 minutes past 2. She spent 15 minutes with them. What time was the appointment over?



twinkl.com

Time Word Problems Challenge Cards

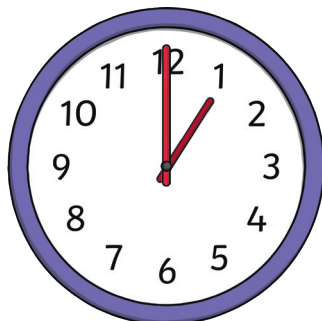
5. Jim woke up at 5 minutes past 5. He was awake for 15 minutes. At what time did Jim fall back to sleep?



twinkl.com

Time Word Problems Challenge Cards



6. It takes Grandad 15 minutes to cut the grass. If he starts at 1 o'clock, what time will he finish?



twinkl.com

Time Word Problems Challenge Cards


7. Sarah practised playing the piano for 15 minutes. She started practising at 5 minutes to 3. What time did she finish?



twinkl.com

Time Word Problems Challenge Cards

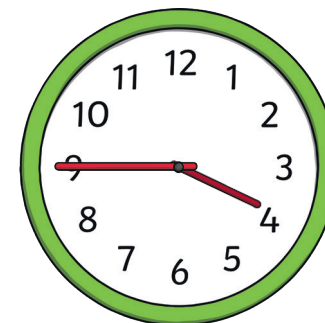
8. Charlie put his chocolate cookies in the oven at 10 minutes to 4. 15 minutes later, they were cooked. What time did Charlie take the cookies out of the oven?



twinkl.com

Time Word Problems Challenge Cards


9. Riley arrived home from school at quarter to 4. His brother, Toby, got home 15 minutes after him. What time did Toby get home?



twinkl.com

Time Word Problems Challenge Cards

10. Juan's favourite cartoon was 15 minutes long. It ended at 20 minutes to 12. What time did it start?

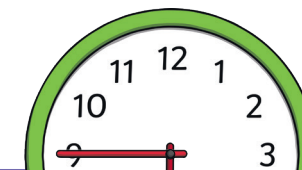


twinkl.com

Time Word Problems Challenge Cards

Answers

- | | |
|-----------------------------|-------------------------------|
| 1. 25 minutes to 6 | 6. Quarter past 1 |
| 2. 10 minutes past 3 | 7. 10 minutes past 3 |
| 3. 10 minutes to 3 | 8. 5 minutes past 4 |
| 4. 20 minutes to 3 | 9. 4 o'clock |
| 5. 20 minutes past 5 | 10. 25 minutes past 11 |



twinkl.com