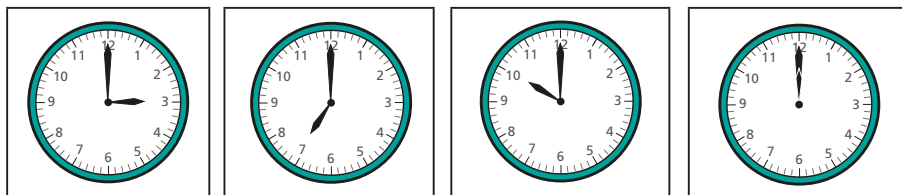


1 Match the clocks to the times.



7 o'clock

3 o'clock

12 o'clock

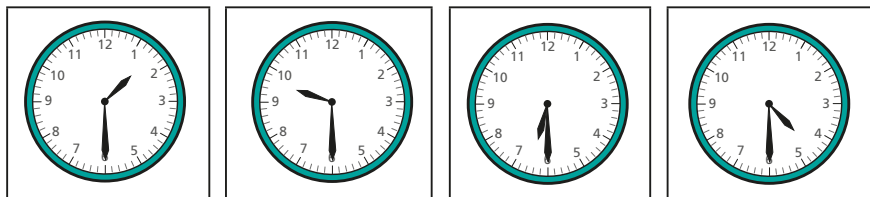
10 o'clock

Complete the sentence.

At o'clock, the minute hand points to



2 Match the clocks to the times.



half past 4

half past 1

half past 9

half past 6

Complete the sentence.

At half past, the minute hand points to







3 Write the time shown on each clock.

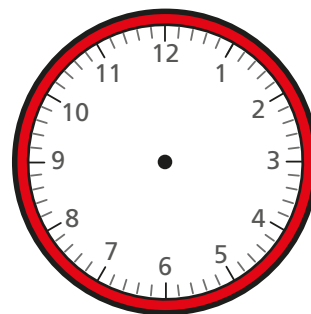
Use the word bank to help you.

o'clock

half past



4 Draw hands to show the time on each clock.



- half past 11
- half past 3
- 4 o'clock
- 1 o'clock


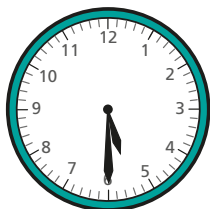
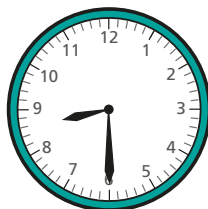



3 Write the time shown on each clock.

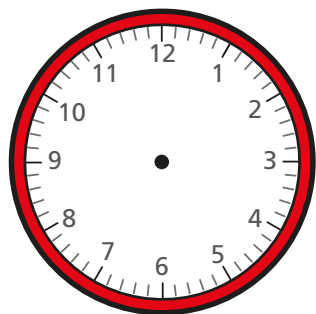
Use the word bank to help you.

o'clock

half past




4 Draw hands to show the time on each clock.



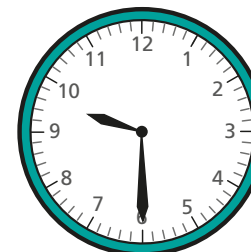
- half past 11
- half past 3
- 4 o'clock
- 1 o'clock

5 Decide whether each sentence is true or false.


a) The clock shows 6 o'clock.



b) The clock shows half past 10



c) The clock shows half past 12



Compare answers with a partner.

